

LENGTHS

A COMPARING LENGTHS

A.1 COMPARING CHILDREN'S HEIGHTS

Ex 1:



The girl is ☐ shorter than ☐ taller than the boy.

Ex 2:



The girl is ☐ shorter than ☐ taller than the boy.

Ex 3:




The girl is ☐ shorter than ☐ taller than the boy.

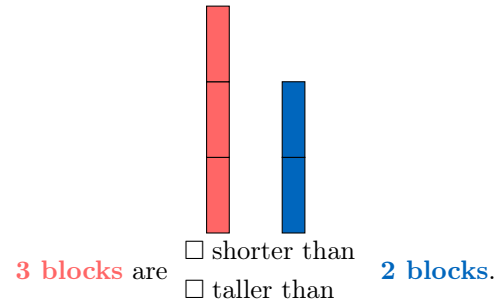
Ex 4:



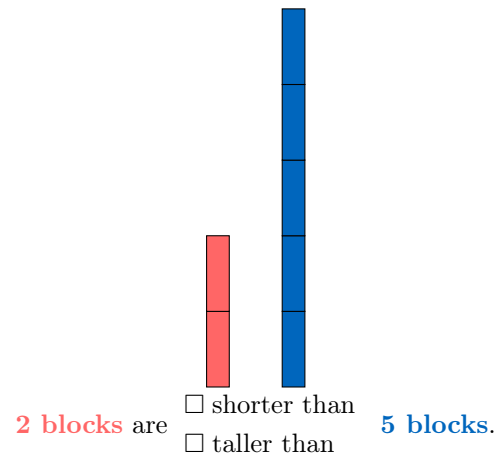
The girl is ☐ shorter than ☐ taller than the boy.



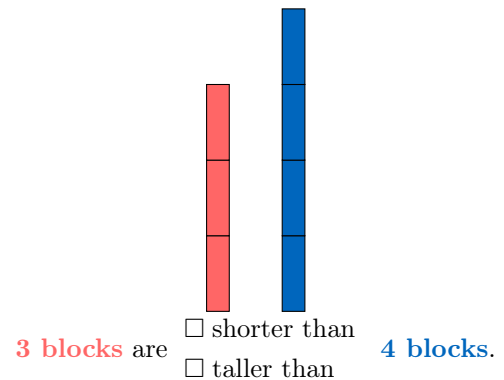
Ex 6:



Ex 7:



Ex 8:



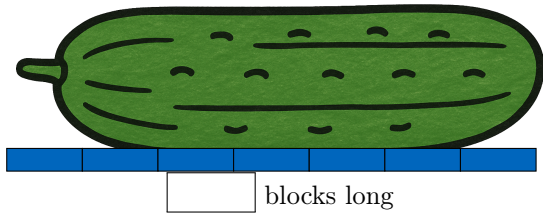
A.2 COMPARING BLOCK'S HEIGHTS

Ex 5:

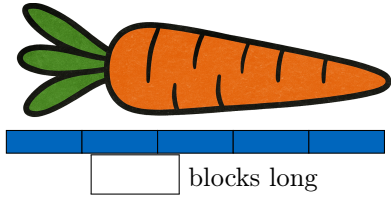
B MEASURING LENGTHS

B.1 MEASURING LENGTHS WITH BLOCKS

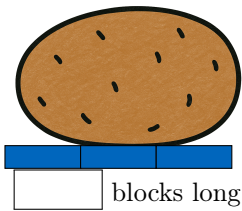
Ex 9: How long?



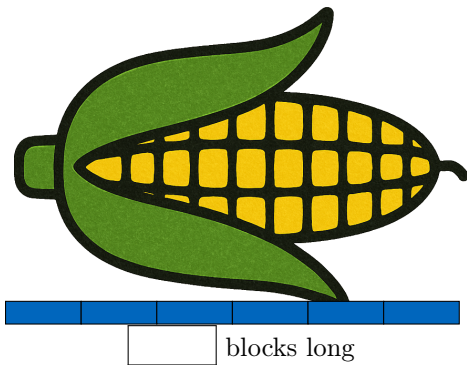
Ex 10: How long?



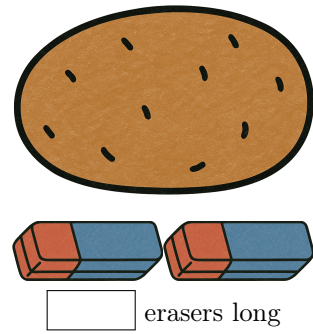
Ex 11: How long?



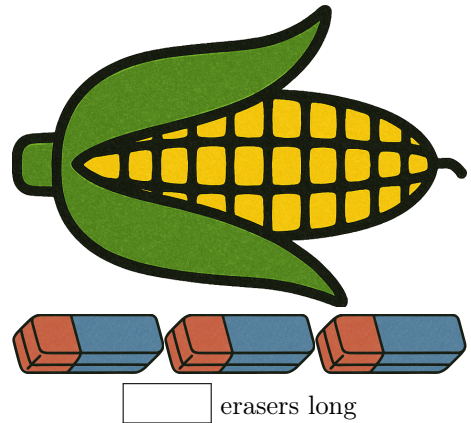
Ex 12: How long?



Ex 15: How long?

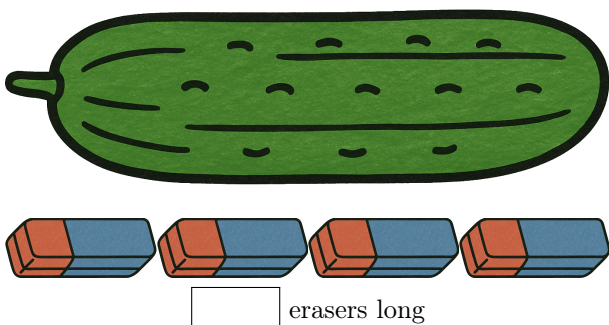


Ex 16: How long?



B.2 MEASURING LENGTHS WITH ERASERS

Ex 13: How long?



Ex 14: How long?

