

LENGTHS

A COMPARING LENGTHS

A.1 COMPARING CHILDREN'S HEIGHTS

Ex 1:



The girl is **taller than** the boy.

Answer: The girl is taller than the boy.

Ex 2:



The girl is **shorter than** the boy.

Answer: The girl is shorter than the boy.

Ex 3:



The girl is **shorter than** the boy.

Answer: The girl is shorter than the boy.

Ex 4:

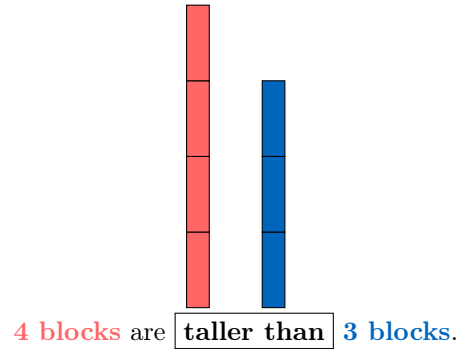


The girl is **taller than** the boy.

Answer: The girl is taller than the boy.

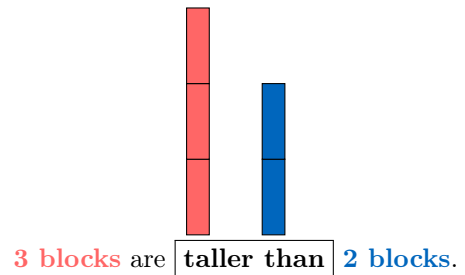
A.2 COMPARING BLOCK'S HEIGHTS

Ex 5:



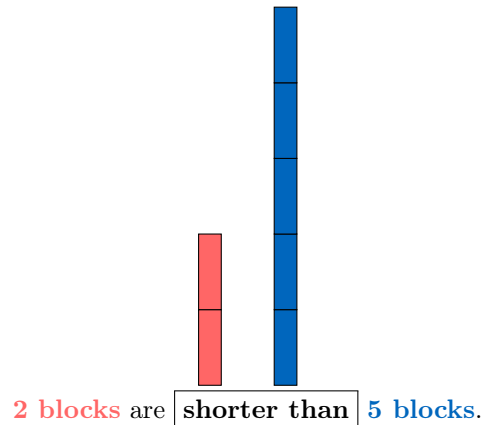
Answer: 4 blocks are taller than 3 blocks.

Ex 6:



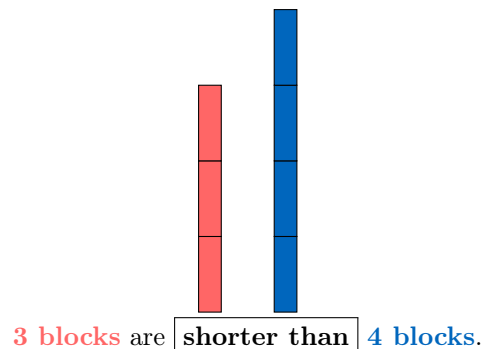
Answer: 3 blocks are taller than 2 blocks.

Ex 7:



Answer: 2 blocks are shorter than 5 blocks.

Ex 8:

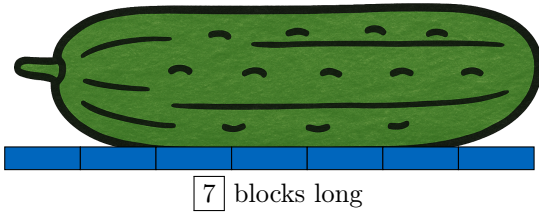


Answer: 3 blocks are shorter than 4 blocks.

B MEASURING LENGTHS

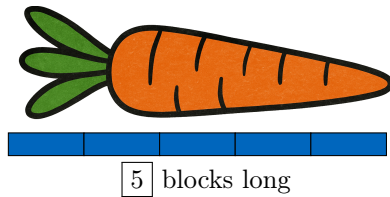
B.1 MEASURING LENGTHS WITH BLOCKS

Ex 9: How long?



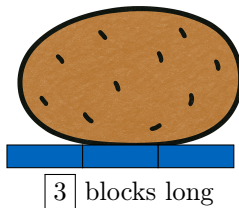
Answer: The cucumber measures 7 blocks long.

Ex 10: How long?



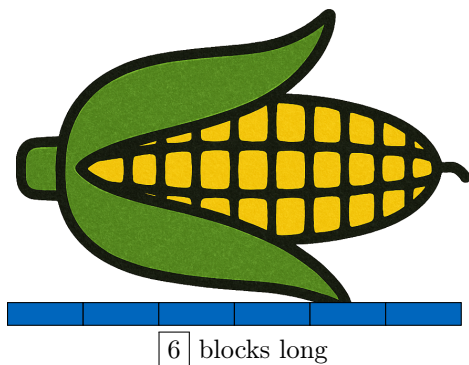
Answer: The carrot measures 5 blocks long.

Ex 11: How long?



Answer: The potato measures 3 blocks long.

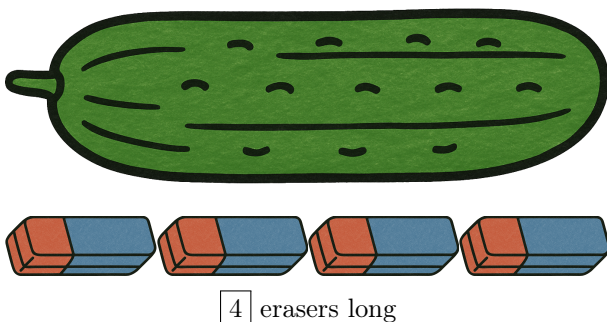
Ex 12: How long?



Answer: The corn measures 6 blocks long.

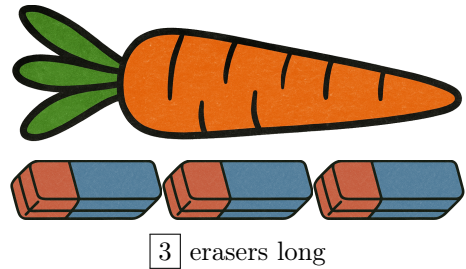
B.2 MEASURING LENGTHS WITH ERASERS

Ex 13: How long?



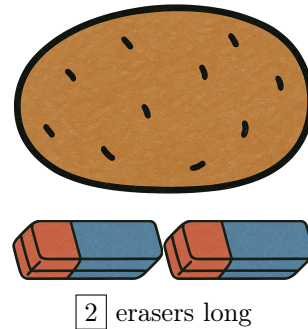
Answer: The cucumber measures 4 erasers long.

Ex 14: How long?



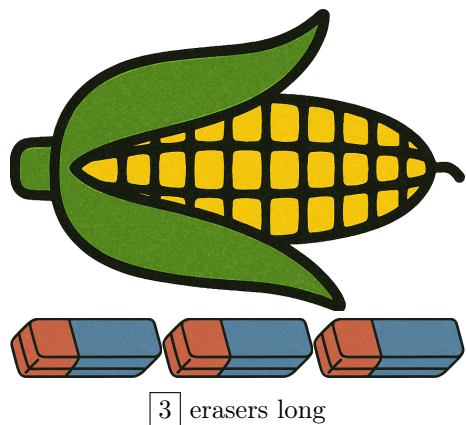
Answer: The carrot measures 3 erasers long.

Ex 15: How long?



Answer: The potato measures 2 erasers long.

Ex 16: How long?



Answer: The corn measures 3 erasers long.

C UNITS OF LENGTH

C.1 CHOOSING THE UNIT OF LENGTH

MCQ 17: Which unit will be used to measure how tall a house is?

Choose 1 answer:

☐ Centimeters

☒ Meters

Answer: Meters will be used to measure how tall a house is.

MCQ 18: Which unit will be used to measure how long a pencil is?

Choose 1 answer:

- ☐ Centimeters
- ☒ Meters

Answer: Centimeters will be used to measure how long a pencil is.

MCQ 19: Which unit will be used to measure how tall a tree is?

Choose 1 answer:

- ☐ Centimeters
- ☒ Meters

Answer: Meters will be used to measure how tall a tree is.

MCQ 20: Which unit will be used to measure how long a book is?


Choose 1 answer:

- ☐ Centimeters
- ☒ Meters

Answer: Centimeters will be used to measure how long a book is.

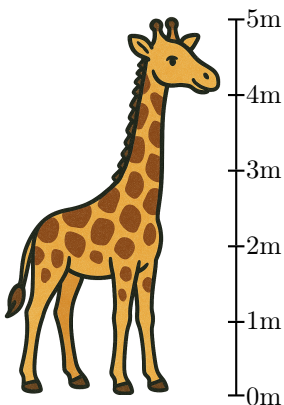
C.2 MEASURING

Ex 21:

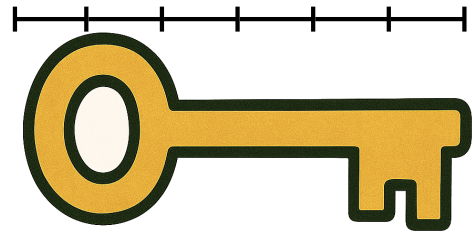


The giraffe measures **meters** tall.

Answer: The giraffe measures 5 meters tall.

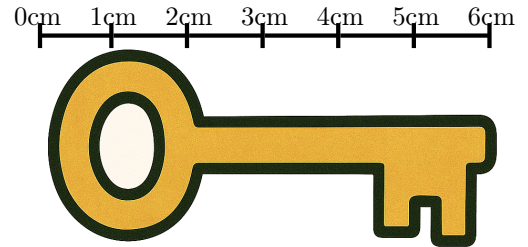


Ex 22:




The key measures **centimeters** long.

Answer: The key measures 6 centimeters long.

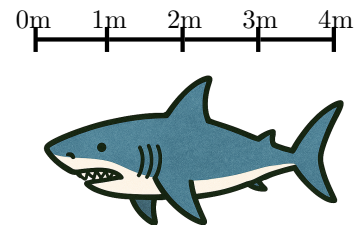


Ex 23:




The shark measures **meters** long.

Answer: The shark measures 4 meters long.



Ex 24:



The lizard measures **centimeters** long.

Answer: The lizard measures 7 centimeters long.

