

SEQUENCES


A PERIODIC SEQUENCE

A.1 FINDING THE NEXT SHAPE IN THE PATTERN 1-1

MCQ 1:



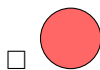

MCQ 2:



MCQ 3:



MCQ 4:



A.2 FINDING THE NEXT SHAPE IN THE PATTERN 1-1-1

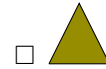
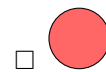

MCQ 5:



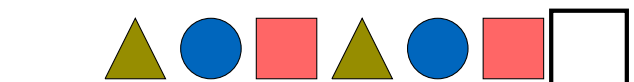
MCQ 6:



MCQ 7:



MCQ 8:



A.3 FINDING THE NEXT SHAPE IN THE PATTERN 1-1-1-1

MCQ 9:



- ☐
- ☐
- ☐
- ☐

MCQ 10:



- ☐
- ☐
- ☐
- ☐

MCQ 11:



- ☐
- ☐
- ☐
- ☐

MCQ 12:



- ☐
- ☐
- ☐
- ☐

A.4 FINDING THE NEXT SHAPE IN THE PATTERN 2-1

MCQ 13:



- ☐
- ☐

MCQ 14:



- ☐
- ☐

MCQ 15:



- ☐
- ☐

MCQ 16:



- ☐
- ☐

B NUMERICAL SEQUENCE

B.1 FINDING THE NEXT NUMBER

Ex 17:

0, 1, 2, 3, 4, .

Ex 18:

7, 6, 5, 4, .

Ex 19:

0, 2, 4, 6, .

Ex 20:

1, 3, 5, 7, .

Ex 21:

10, 8, 6, 4, .

Ex 22:

0, 5, 10, 15, .

Ex 23:

1, 4, 7, 10, .

Ex 24:

0, 4, 8, 12, .

Ex 25:

20, 17, 14, 11, .