

TIME

A DAY AND NIGHT

A.1 FINDING DAY AND NIGHT

MCQ 1:



Check the part of the day for this picture:

- ☐ Day
- ☐ Night

MCQ 2:



Check the part of the day for this picture:

- ☐ Day
- ☐ Night

MCQ 3:



Check the part of the day for this picture:

- ☐ Day
- ☐ Night

MCQ 4:



Check the part of the day for this picture:

- ☐ Morning
- ☐ Night

MCQ 5:



Check the part of the day for this picture:

- ☐ Day
- ☐ Night

MCQ 6:



Check the part of the day for this picture:

- ☐ Day
- ☐ Night

B ORDER OF THE DAY

B.1 GUESSING THE TIME OF DAY

MCQ 7:



Check the part of the day shown in this picture:

- ☐ Morning
- ☐ Noon
- ☐ Afternoon
- ☐ Evening

MCQ 8:



Check the part of the day shown in this picture:

- ☐ Morning
- ☐ Noon
- ☐ Afternoon
- ☐ Evening

MCQ 9:



Check the part of the day shown in this picture:

- ☐ Morning
- ☐ Noon
- ☐ Afternoon
- ☐ Evening

MCQ 10:



Check the part of the day shown in this picture:

- ☐ Morning
- ☐ Noon
- ☐ Afternoon
- ☐ Evening

C DAYS OF THE WEEK

C.1 DISCOVERING THE NEXT DAY

MCQ 11: What day comes after Tuesday?

- ☐ Monday
- ☐ Tuesday
- ☐ Wednesday
- ☐ Thursday
- ☐ Friday
- ☐ Saturday



☐ Sunday

MCQ 12: What day comes before Wednesday?

☐ Monday

☐ Tuesday

☐ Wednesday

☐ Thursday

☐ Friday

☐ Saturday

☐ Sunday

MCQ 13: What day comes after Friday?

☐ Monday

☐ Tuesday

☐ Wednesday

☐ Thursday

☐ Friday

☐ Saturday

☐ Sunday

MCQ 14: What day comes before Sunday?

☐ Monday

☐ Tuesday

☐ Wednesday

☐ Thursday

☐ Friday

☐ Saturday

☐ Sunday

MCQ 15: What day comes after Thursday?

☐ Monday

☐ Tuesday

☐ Wednesday

☐ Thursday

☐ Friday

☐ Saturday

☐ Sunday

MCQ 16: What day comes before Monday?

☐ Monday

☐ Tuesday

☐ Wednesday

☐ Thursday

☐ Friday


☐ Saturday

☐ Sunday

D READING CLOCKS FOR O'CLOCK TIMES

D.1 READING CLOCKS FOR O'CLOCK TIMES

Ex 17:




Morning

What time does this clock show?

It's :00 in the morning.

Ex 18:




Afternoon

What time does this clock show?

It's :00 in the afternoon.

Ex 19:




Night

What time does this clock show?

It's :00 at night.

Ex 20:




Evening

What time does this clock show?

It's :00 in the evening.

Ex 21:



Morning

What time does this clock show?

It's :00 in the morning.